

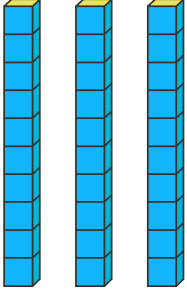
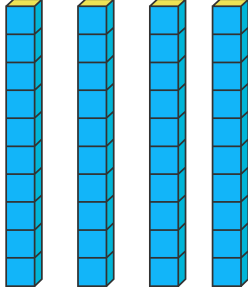
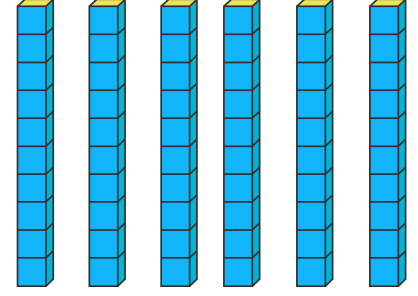
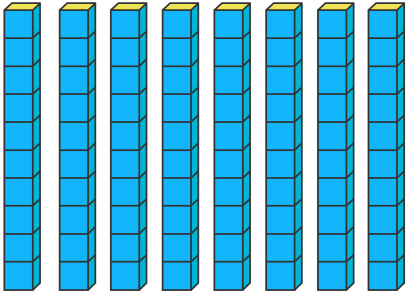
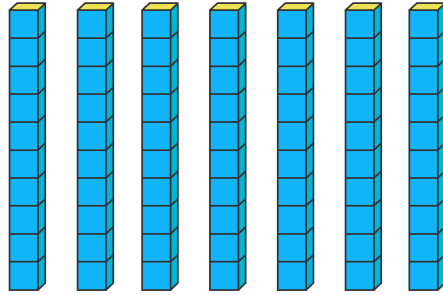
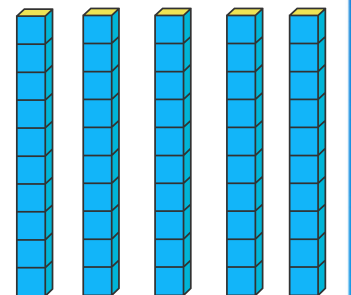
Onluk ve Birlikler

TARİH

---/---/---

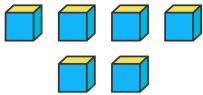
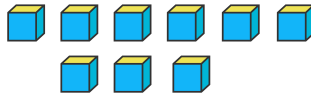
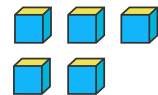
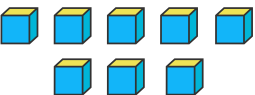
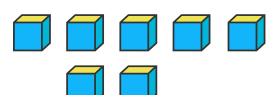
! Aşağıdaki 10'luk blokları 10 ar 10 ar sayarak toplam blok sayısını yazalım.

örnek

**..3. Onluk = 30****.... Onluk =****.... Onluk =****.... Onluk =****.... Onluk =****.... Onluk =**

! Aşağıdaki 1'lik blokları 1'er 1'er sayarak toplam blok sayısını yazalım.

örnek

**..6. Birlik = 6****.... Birlik =****.... Birlik =****.... Birlik =****.... Birlik =****.... Birlik =**